

SUBJECT NAME –MATH
GRADE- 2

WORKSHEET

Unit -9
Let us multiply

I. Fill in the blanks

1.



There are _____ groups of _____ cupcakes in each.

2.



There are _____ groups of _____ apples in each.

II. Fill in the blanks











a. $72 \times 0 =$ _____

b. $2 \times 10 =$ _____

c. $4 \times 4 =$ _____

d. $3 \times 6 =$ _____

III. Write the total number of wheels in each case if each car has 4 wheels. A few have been done for you. (Hint: Skip count in 4s.)

	1 group of 4 wheels	$1 \times 4 = 4$	
			
			
	4 group of 4 wheels	$4 \times 4 = 16$	
			
			
	7 group of 4 wheels	$7 \times 4 = 28$	
			
			
			



III. Match the following.

Column A	Column B
23×1	65
65×1	24
24×1	23
66×1	60
60×1	66